

# KENDRIYA VIDYALAYA KHAGARIA

## CYCLE-1

CLASS-1 'A'

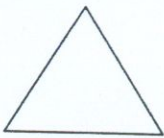
SUB-MATHS

NAME \_\_\_\_\_

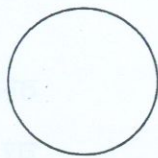
Roll No. \_\_\_\_\_

DATE \_\_\_\_\_

1. Write the name of different shapes



\_\_\_\_\_








\_\_\_\_\_




\_\_\_\_\_

2. Match it -



3. Tick (✓) the smallest tree



4. Colour the biggest shape-

