

KENDRIYA VIDYALAYA, KHAGARIA

CYCLE No.-I
SUB-MATHS
Std-I'B'

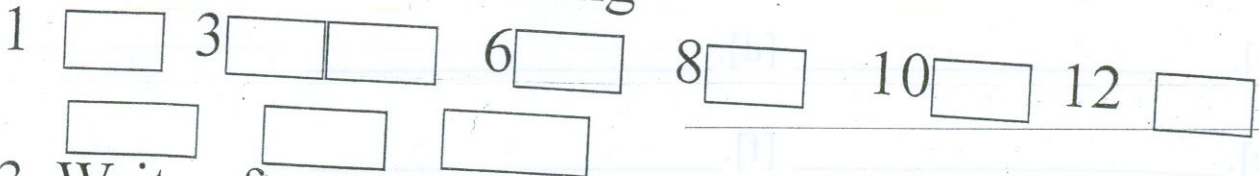
Name:- _____

Roll No:- _____


1. Match the shapes





2. Complete the counting





3. Write after numbers

[a.] $5 =$ 





[b.] $2 =$ 





[c.] $4 =$ 


[d.] $6 =$ 

[e.] $8 =$ 

4. Write the table of 2

$2 \times 1 =$  $2 \times 2 =$  $2 \times 3 =$  $2 \times 4 =$ 

$2 \times 5 =$  $2 \times 6 =$  $2 \times 7 =$  $2 \times 8 =$ 

$2 \times 9 =$  $2 \times 10 =$ 